



Name _____ Date _____

Life Cycle of an Ice Cube


Show the life cycle of an ice cube. Draw a picture to go with each label. Then write a sentence to describe each picture. Use the words **solid**, **liquid**, and **gas**.

Making an Ice Cube



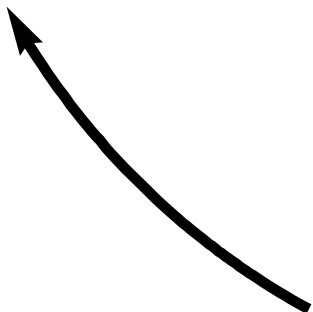


Melted Ice Cube



Frozen Water





Melting Ice Cube



