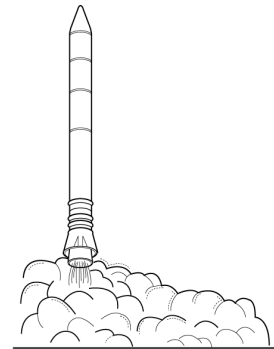


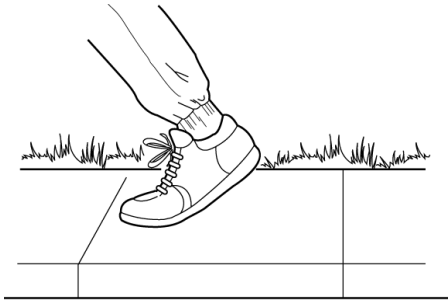


What is Newton's third law of motion?

Lesson Review

Label the *action force* and the *reaction force* in each of the following diagrams.



Skill Challenge

Skills: researching, modeling

Find out how an octopus or a squid uses Newton's third law of motion to escape from enemies. Use a biology text or other reference materials. Then, draw a picture of an octopus or a squid in the space below, labeling the action force and the reaction force.